

Name: _____

Date: _____

Write your numbers from 1 to 20.

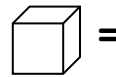
How many items are in each line?


numeral

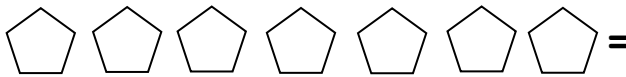
word name



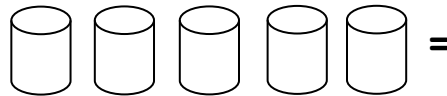


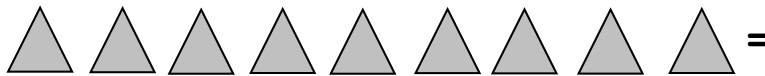









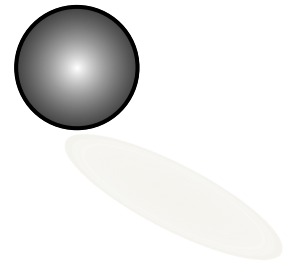
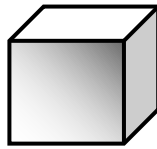
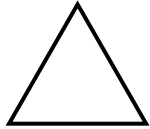











Name these shapes.





Circle the group that has more items.

Circle the group that has less items.

Which is less? 6 or 9

Which is more? 7 or 4

Instructor: Please have the student verbally count to 100.











Name: Solutions

Date: _____

Write your numbers from 1 to 20.

1, 2, 3, 4, 5, 6, 7, 8, 9, 10,
11, 12, 13, 14, 15, 16, 17, 18, 19, 20


How many items are in each line?

	<u>numeral</u>	<u>word name</u>
 =	<u>4</u>	<u>four</u>
 =	<u>8</u>	<u>eight</u>
 =	<u>1</u>	<u>one</u>
 =	<u>10</u>	<u>ten</u>
 =	<u>7</u>	<u>seven</u>
 =	<u>2</u>	<u>two</u>
 =	<u>5</u>	<u>five</u>
 =	<u>9</u>	<u>nine</u>
 =	<u>6</u>	<u>six</u>
 =	<u>3</u>	<u>three</u>


Name these shapes.



triangle




cube



sphere



square



circle



cylinder

Circle the group that has more items.

Circle the group that has less items.

Which is less? 6 or 9

Which is more? 7 or 4

Instructor: Please have the student verbally count to 100.