

Name: \_\_\_\_\_

Date: \_\_\_\_\_

Write your numbers from 1 to 20.

\_\_\_\_\_

\_\_\_\_\_

How many items are in each line?

numeral

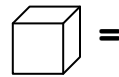
word name



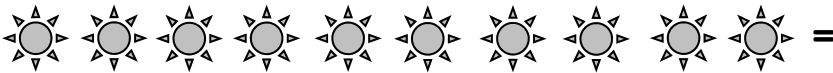
\_\_\_\_\_



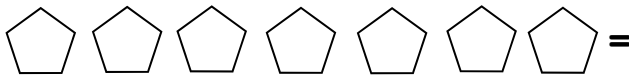
\_\_\_\_\_



\_\_\_\_\_



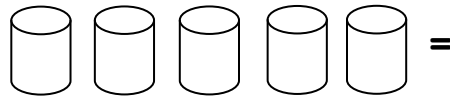
\_\_\_\_\_



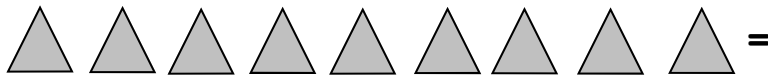
\_\_\_\_\_



\_\_\_\_\_




\_\_\_\_\_



\_\_\_\_\_

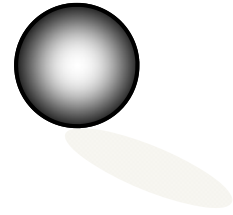
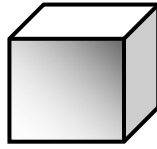
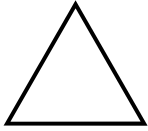


\_\_\_\_\_



\_\_\_\_\_




Name these shapes.



\_\_\_\_\_

\_\_\_\_\_

\_\_\_\_\_

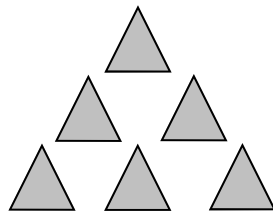
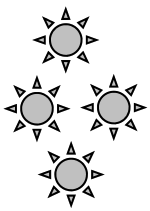


\_\_\_\_\_



\_\_\_\_\_

\_\_\_\_\_

Circle the group that has more items.



Circle the group that has less items.



Which is less? 6 or 9

Which is more? 7 or 4

**Instructor: Please have the student verbally count to 100.**

Write your numbers from 1 to 20.

1, 2, 3, 4, 5, 6, 7, 8, 9, 10,  
11, 12, 13, 14, 15, 16, 17, 18, 19, 20,

How many items are in each line?

numeral

word name



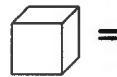
4

four




8

eight



1

one



10

ten



7

seven



2

two



5

five



9

nine



6



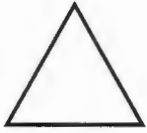
six



3

three

Name these shapes.



triangle

cube

sphere



square

circle

cylinder

Circle the group that has more items.

Circle the group that has less items.

Which is less? 6 or 9

Which is more? 7 or 4

**Instructor: Please have the student verbally count to 100.**